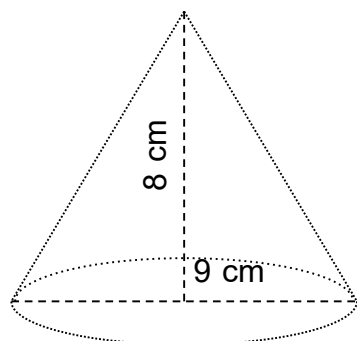


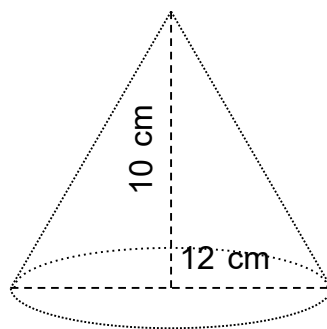
Find the volume.

1.



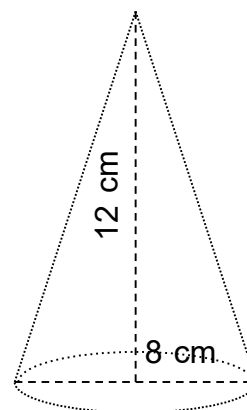
$$V = 170 \text{ cm}^3$$

2.



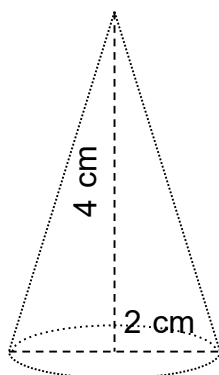
$$V = 377 \text{ cm}^3$$

3.



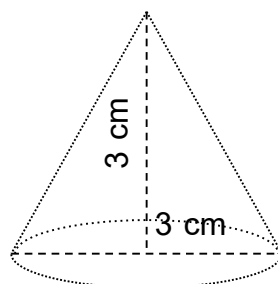
$$V = 201 \text{ cm}^3$$

4.



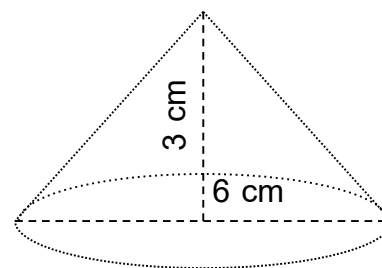
$$V = 4 \text{ cm}^3$$

5.



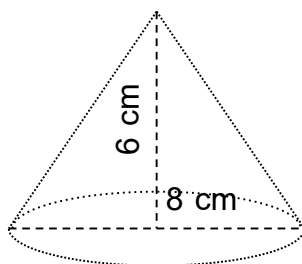
$$V = 7 \text{ cm}^3$$

6.



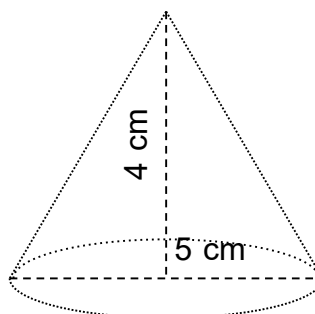
$$V = 28 \text{ cm}^3$$

7.



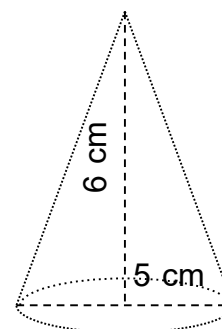
$$V = 101 \text{ cm}^3$$

8.



$$V = 26 \text{ cm}^3$$

9.



$$V = 39 \text{ cm}^3$$