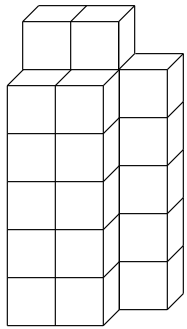


Determine the number of cubes.

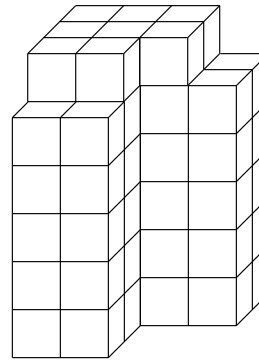
1.



27 cubic units

---

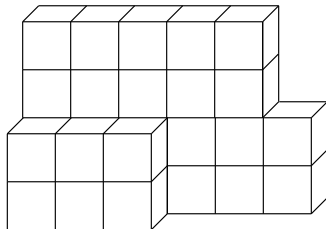
2.



68 cubic units

---

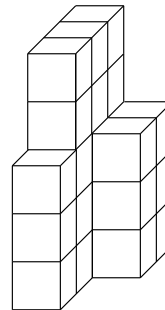
3.



28 cubic units

---

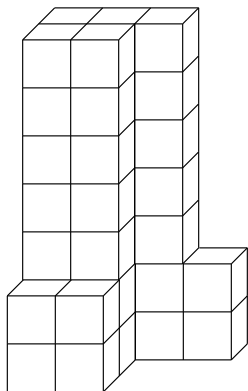
4.



24 cubic units

---

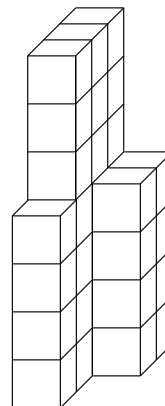
5.



41 cubic units

---

6.



33 cubic units

---