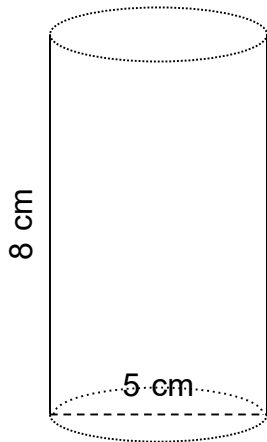


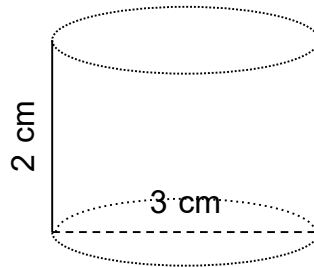
Find the volume.

1.



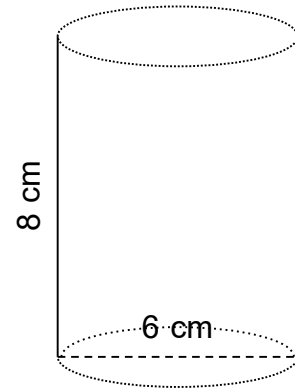
$$V = 157.08 \text{ cm}^3$$

2.



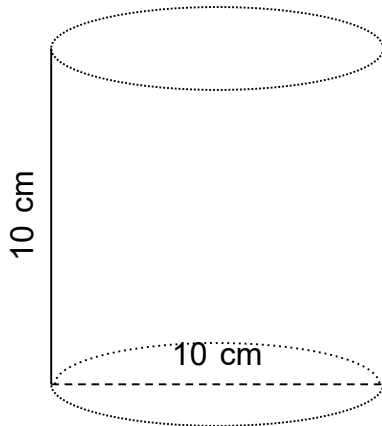
$$V = 14.14 \text{ cm}^3$$

3.



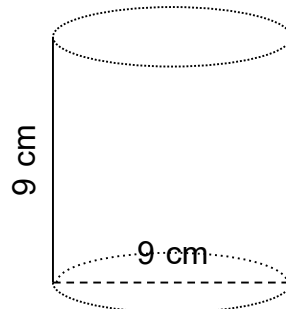
$$V = 226.19 \text{ cm}^3$$

4.



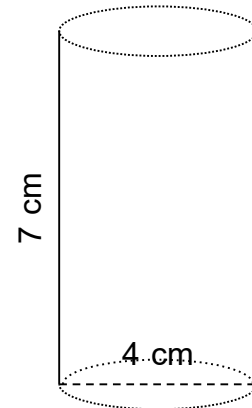
$$V = 785.40 \text{ cm}^3$$

5.



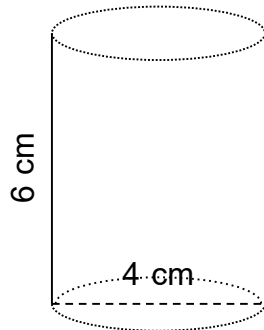
$$V = 572.56 \text{ cm}^3$$

6.



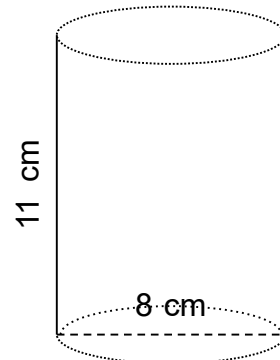
$$V = 87.96 \text{ cm}^3$$

7.



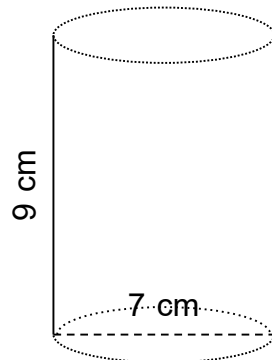
$$V = 75.40 \text{ cm}^3$$

8.



$$V = 552.92 \text{ cm}^3$$

9.



$$V = 346.36 \text{ cm}^3$$