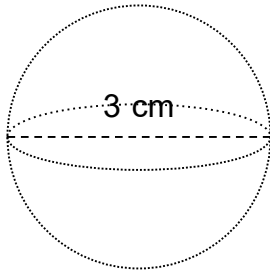


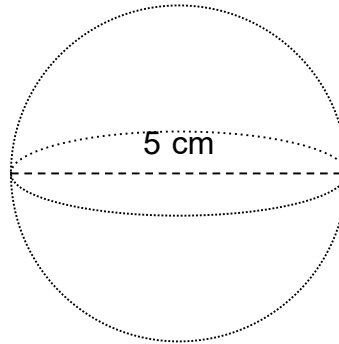
Find the volume.

1.



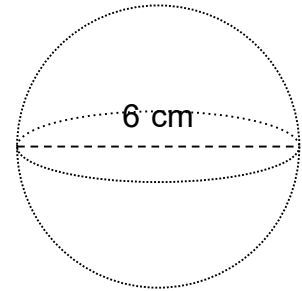
$$V = 14 \text{ cm}^3$$

2.



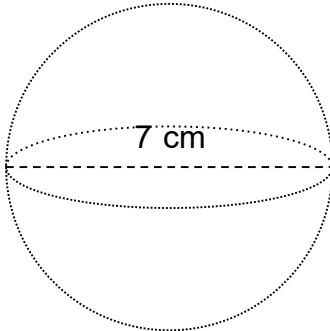
$$V = 65 \text{ cm}^3$$

3.



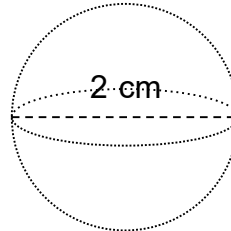
$$V = 113 \text{ cm}^3$$

4.



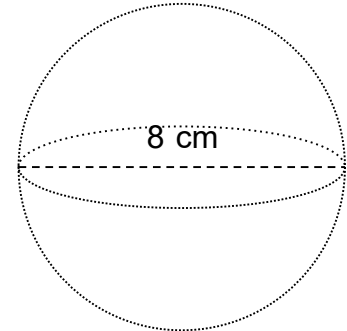
$$V = 180 \text{ cm}^3$$

5.



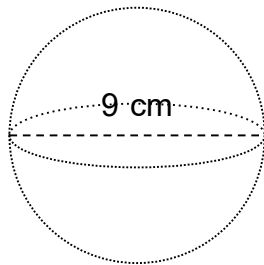
$$V = 4 \text{ cm}^3$$

6.



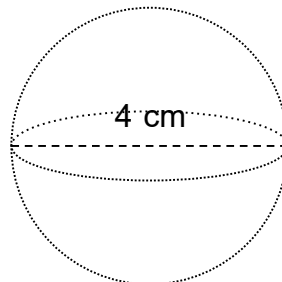
$$V = 268 \text{ cm}^3$$

7.



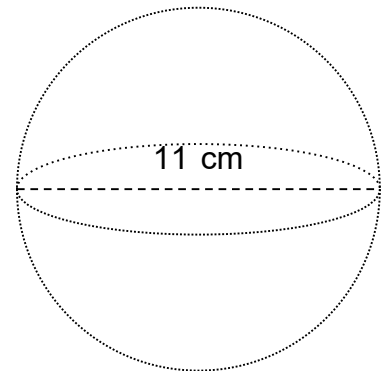
$$V = 382 \text{ cm}^3$$

8.



$$V = 34 \text{ cm}^3$$

9.



$$V = 697 \text{ cm}^3$$