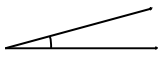
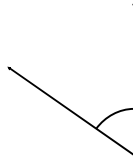


Classify and measure the angles.

1.



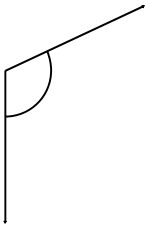
2.



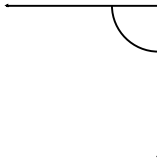
3.



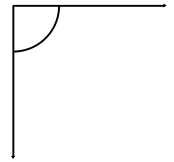
4.



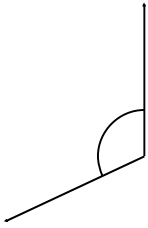
5.



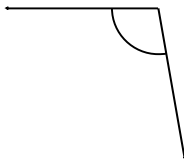
6.



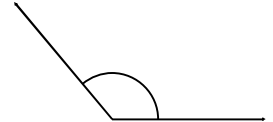
7.



8.



9.



10.



11.



12.

