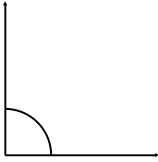


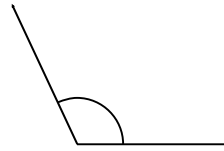
Classify and measure the angles.

1.



Right

2.



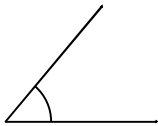
Obtuse

3.



Acute

4.



Acute

5.



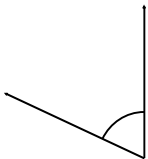
Acute

6.



Obtuse

7.



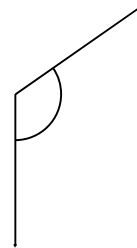
Acute

8.



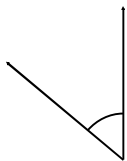
Obtuse

9.



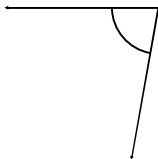
Obtuse

10.



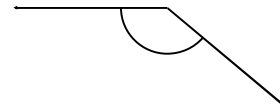
Acute

11.



Acute

12.



Obtuse