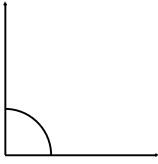
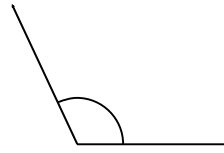


Classify and measure the angles.

1.



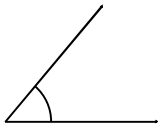
2.



3.



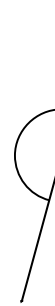
4.



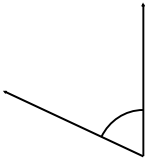
5.



6.



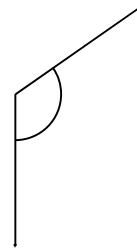
7.



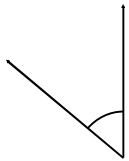
8.



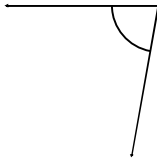
9.



10.



11.



12.

