

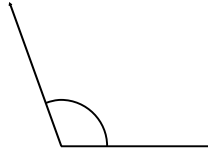
Classify and measure the angles.

1.



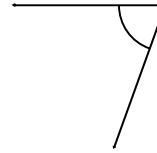
\_\_\_\_\_

2.



\_\_\_\_\_

3.



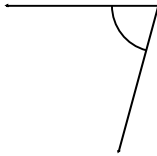
\_\_\_\_\_

4.



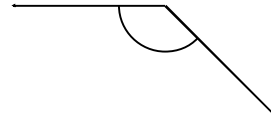
\_\_\_\_\_

5.



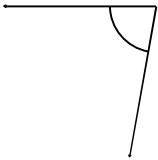
\_\_\_\_\_

6.



\_\_\_\_\_

7.



\_\_\_\_\_

8.



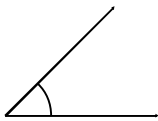
\_\_\_\_\_

9.



\_\_\_\_\_

10.



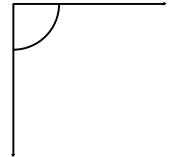
\_\_\_\_\_

11.



\_\_\_\_\_

12.



\_\_\_\_\_