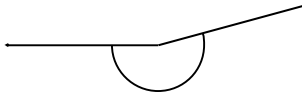


Classify and measure the angles.

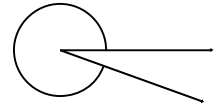
1.



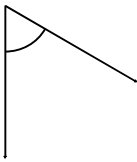
2.



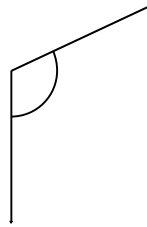
3.



4.



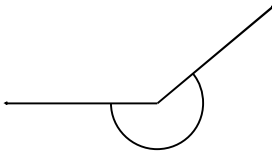
5.



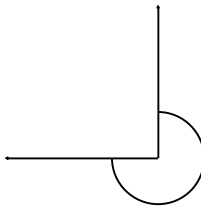
6.




7.



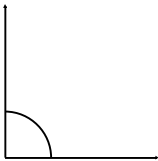
8.



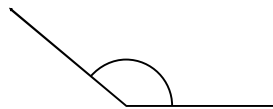
9.



10.



11.



12.