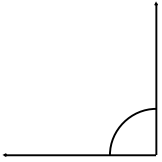


Classify and measure the angles.

1.



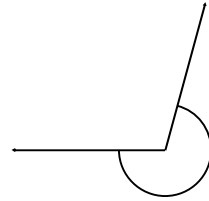
Right

2.



Obtuse

3.



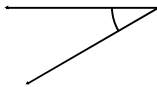
Reflex

4.



Straight

5.



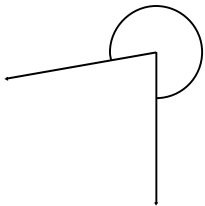
Acute

6.



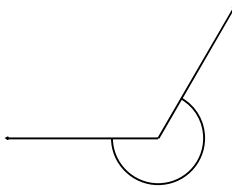
Reflex

7.




Reflex

8.



Reflex

9.



Reflex

10.



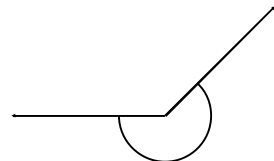
Straight

11.



Reflex

12.



Reflex