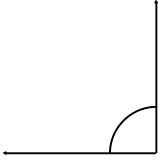


Classify and measure the angles.

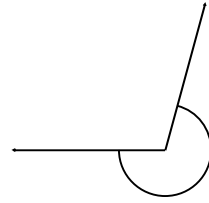
1.



2.



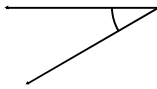
3.



4.



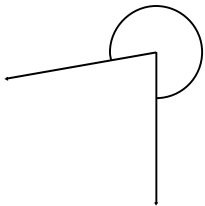
5.



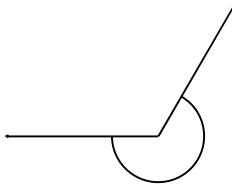
6.




7.



8.



9.



10.



11.



12.

