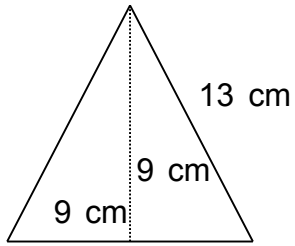


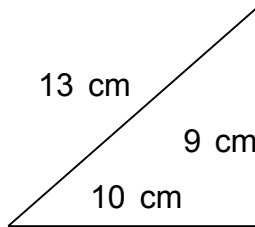
Find the area.

1.



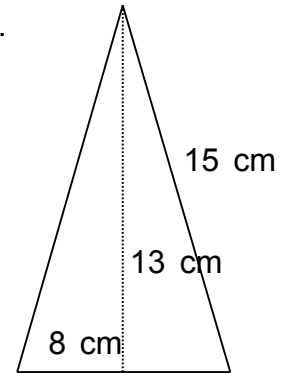
$$A = 40.5 \text{ cm}^2$$

2.



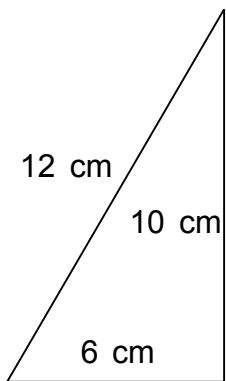
$$A = 45 \text{ cm}^2$$

3.



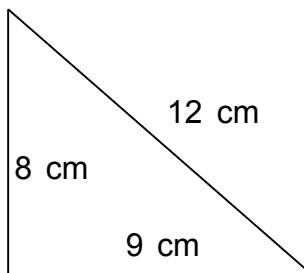
$$A = 52 \text{ cm}^2$$

4.



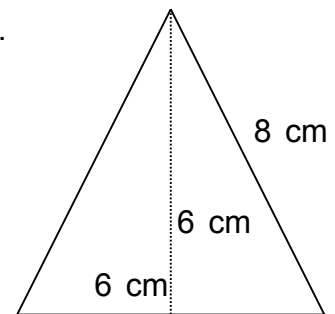
$$A = 30 \text{ cm}^2$$

5.



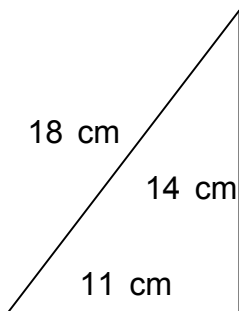
$$A = 36 \text{ cm}^2$$

6.



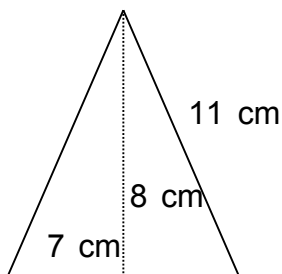
$$A = 18 \text{ cm}^2$$

7.



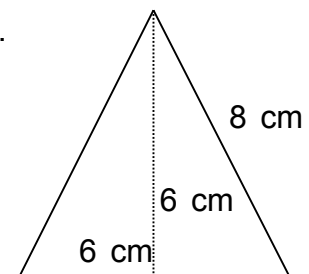
$$A = 77 \text{ cm}^2$$

8.



$$A = 28 \text{ cm}^2$$

9.



$$A = 18 \text{ cm}^2$$