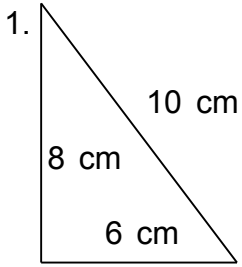
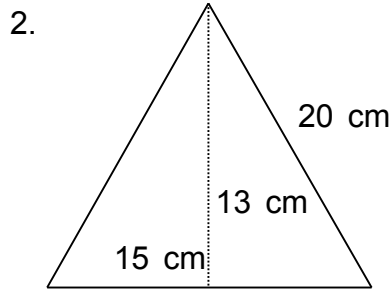


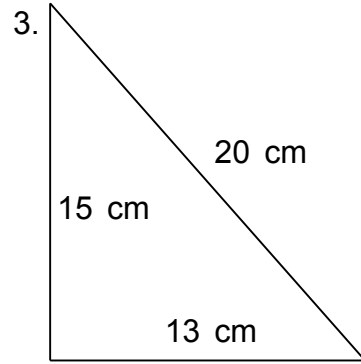
Find the area.



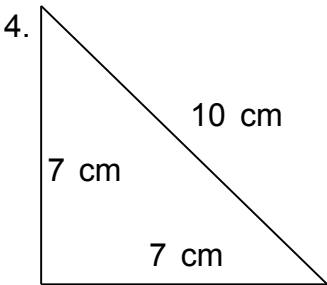
$A = 24 \text{ cm}^2$



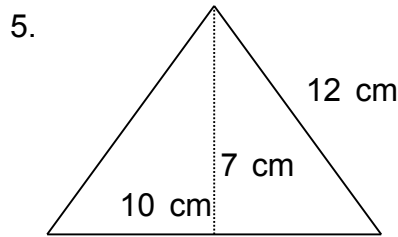
$A = 97.5 \text{ cm}^2$



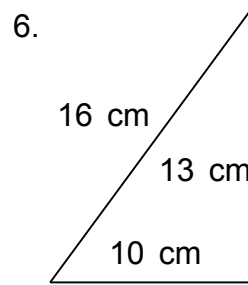
$A = 97.5 \text{ cm}^2$



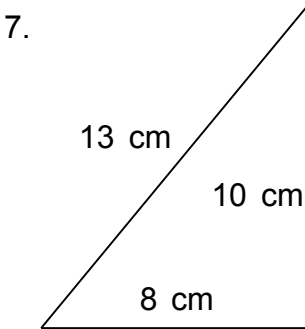
$A = 24.5 \text{ cm}^2$



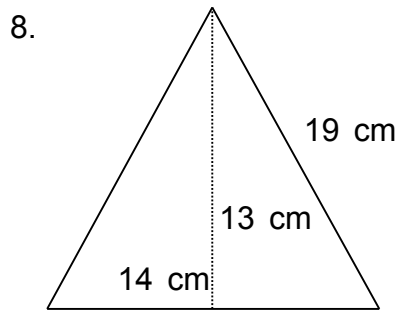
$A = 35 \text{ cm}^2$



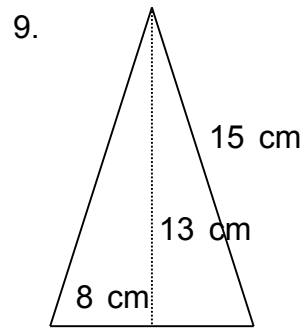
$A = 65 \text{ cm}^2$



$A = 40 \text{ cm}^2$



$A = 91 \text{ cm}^2$



$A = 52 \text{ cm}^2$