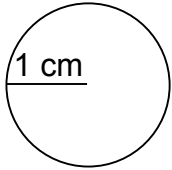


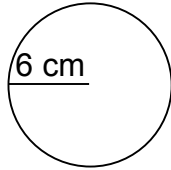
Calculate the circumference and area of each circle.

1.



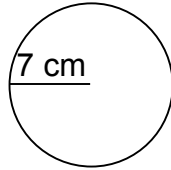
$$\begin{aligned} C &= 6.28 \text{ cm} \\ A &= 3.14 \text{ cm}^2 \end{aligned}$$

2.



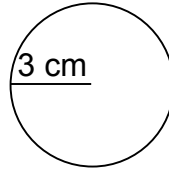
$$\begin{aligned} C &= 37.68 \text{ cm} \\ A &= 113.04 \text{ cm}^2 \end{aligned}$$

3.



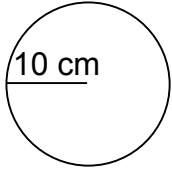
$$\begin{aligned} C &= 43.96 \text{ cm} \\ A &= 153.86 \text{ cm}^2 \end{aligned}$$

4.



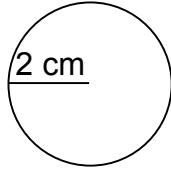
$$\begin{aligned} C &= 18.84 \text{ cm} \\ A &= 28.26 \text{ cm}^2 \end{aligned}$$

5.



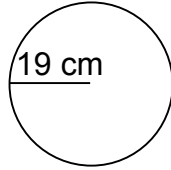
$$\begin{aligned} C &= 62.80 \text{ cm} \\ A &= 314.00 \text{ cm}^2 \end{aligned}$$

6.



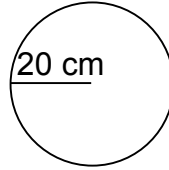
$$\begin{aligned} C &= 12.56 \text{ cm} \\ A &= 12.56 \text{ cm}^2 \end{aligned}$$

7.



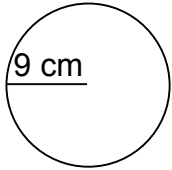
$$\begin{aligned} C &= 119.32 \text{ cm} \\ A &= 1,133.54 \text{ cm}^2 \end{aligned}$$

8.



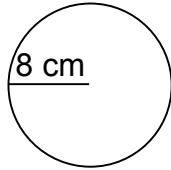
$$\begin{aligned} C &= 125.60 \text{ cm} \\ A &= 1,256.00 \text{ cm}^2 \end{aligned}$$

9.



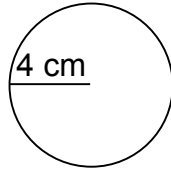
$$\begin{aligned} C &= 56.52 \text{ cm} \\ A &= 254.34 \text{ cm}^2 \end{aligned}$$

10.



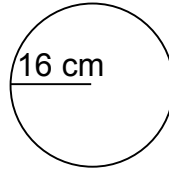
$$\begin{aligned} C &= 50.24 \text{ cm} \\ A &= 200.96 \text{ cm}^2 \end{aligned}$$

11.



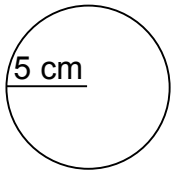
$$\begin{aligned} C &= 25.12 \text{ cm} \\ A &= 50.24 \text{ cm}^2 \end{aligned}$$

12.



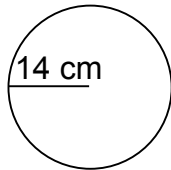
$$\begin{aligned} C &= 100.48 \text{ cm} \\ A &= 803.84 \text{ cm}^2 \end{aligned}$$

13.



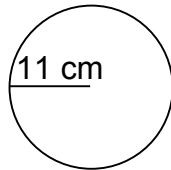
$$\begin{aligned} C &= 31.40 \text{ cm} \\ A &= 78.50 \text{ cm}^2 \end{aligned}$$

14.



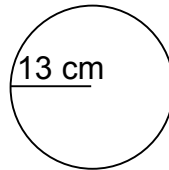
$$\begin{aligned} C &= 87.92 \text{ cm} \\ A &= 615.44 \text{ cm}^2 \end{aligned}$$

15.



$$\begin{aligned} C &= 69.08 \text{ cm} \\ A &= 379.94 \text{ cm}^2 \end{aligned}$$

16.



$$\begin{aligned} C &= 81.64 \text{ cm} \\ A &= 530.66 \text{ cm}^2 \end{aligned}$$