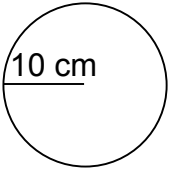
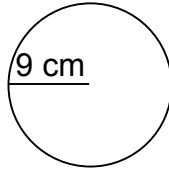
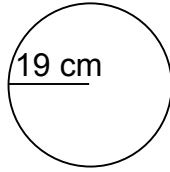
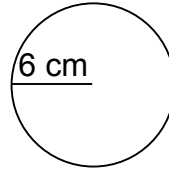


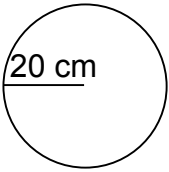
Calculate the circumference and area of each circle.

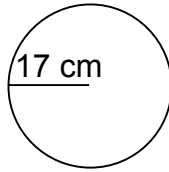
1.  10 cm  
\_\_\_\_\_  
\_\_\_\_\_

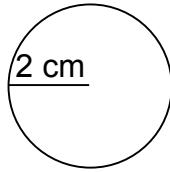
2.  9 cm  
\_\_\_\_\_  
\_\_\_\_\_

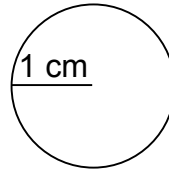
3.  19 cm  
\_\_\_\_\_  
\_\_\_\_\_

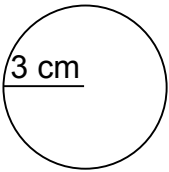
4.  6 cm  
\_\_\_\_\_  
\_\_\_\_\_

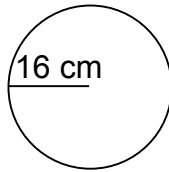
5.  20 cm  
\_\_\_\_\_  
\_\_\_\_\_

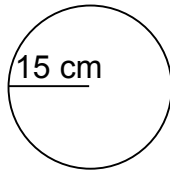
6.  17 cm  
\_\_\_\_\_  
\_\_\_\_\_

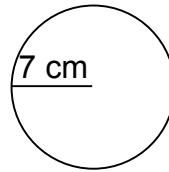
7.  2 cm  
\_\_\_\_\_  
\_\_\_\_\_

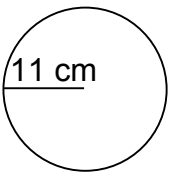
8.  1 cm  
\_\_\_\_\_  
\_\_\_\_\_

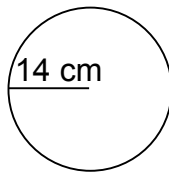
9.  3 cm  
\_\_\_\_\_  
\_\_\_\_\_

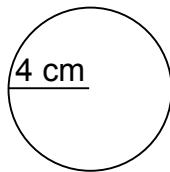
10.  16 cm  
\_\_\_\_\_  
\_\_\_\_\_

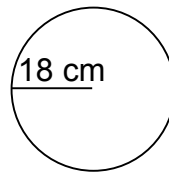
11.  15 cm  
\_\_\_\_\_  
\_\_\_\_\_

12.  7 cm  
\_\_\_\_\_  
\_\_\_\_\_

13.  11 cm  
\_\_\_\_\_  
\_\_\_\_\_

14.  14 cm  
\_\_\_\_\_  
\_\_\_\_\_

15.  4 cm  
\_\_\_\_\_  
\_\_\_\_\_

16.  18 cm  
\_\_\_\_\_  
\_\_\_\_\_