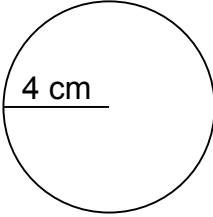
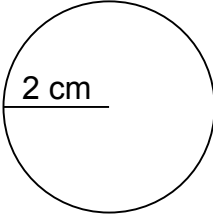
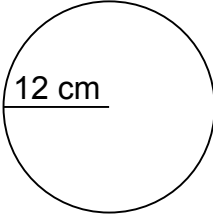
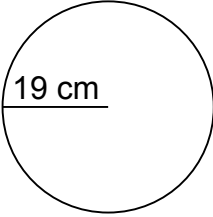
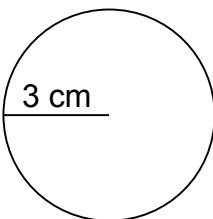
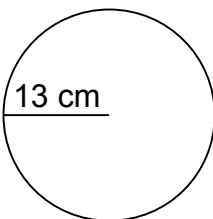
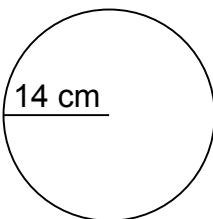
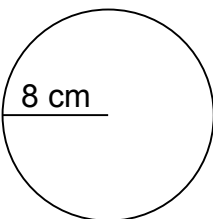
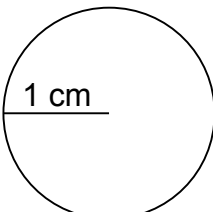
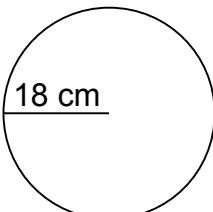
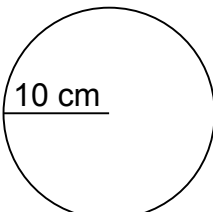
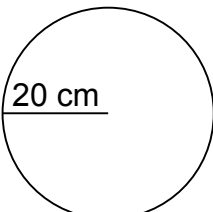
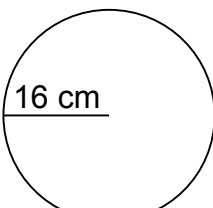
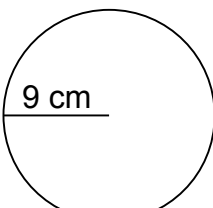
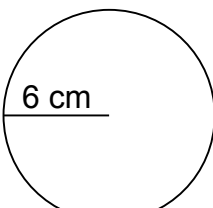
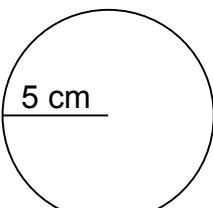


Calculate the circumference of each circle.

1.	 _____	2.	 _____	3.	 _____	4.	 _____
----	--------------------------------------------------------------------------------------------	----	--------------------------------------------------------------------------------------------	----	---------------------------------------------------------------------------------------------	----	----------------------------------------------------------------------------------------------

5.	 _____	6.	 _____	7.	 _____	8.	 _____
----	--------------------------------------------------------------------------------------------	----	--------------------------------------------------------------------------------------------	----	---------------------------------------------------------------------------------------------	----	----------------------------------------------------------------------------------------------

9.	 _____	10.	 _____	11.	 _____	12.	 _____
----	----------------------------------------------------------------------------------------------	-----	----------------------------------------------------------------------------------------------	-----	-----------------------------------------------------------------------------------------------	-----	------------------------------------------------------------------------------------------------

13.	 _____	14.	 _____	15.	 _____	16.	 _____
-----	----------------------------------------------------------------------------------------------	-----	----------------------------------------------------------------------------------------------	-----	-----------------------------------------------------------------------------------------------	-----	------------------------------------------------------------------------------------------------