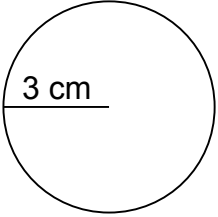
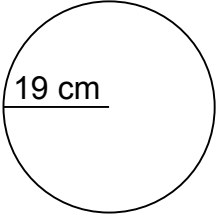
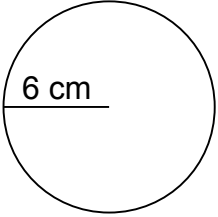
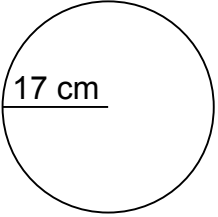
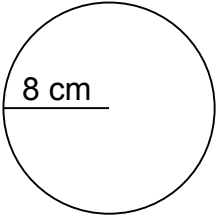
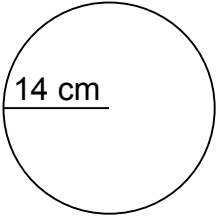
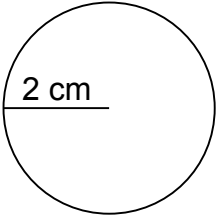
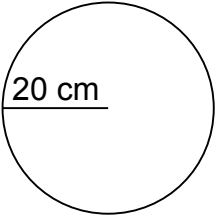
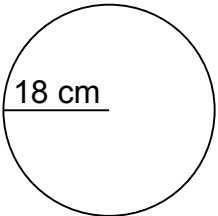
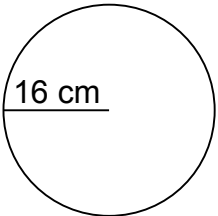
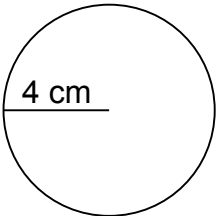
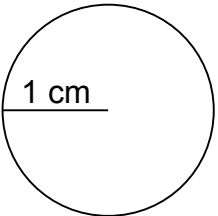
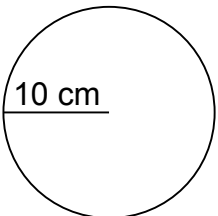
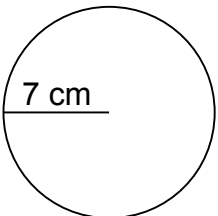
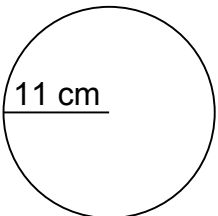
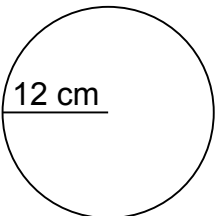


Calculate the circumference of each circle.

1. 
C=18.84 cm
2. 
C=119.32 cm
3. 
C=37.68 cm
4. 
C=106.76 cm
5. 
C=50.24 cm
6. 
C=87.92 cm
7. 
C=12.56 cm
8. 
C=125.60 cm
9. 
C=113.04 cm
10. 
C=100.48 cm
11. 
C=25.12 cm
12. 
C=6.28 cm
13. 
C=62.80 cm
14. 
C=43.96 cm
15. 
C=69.08 cm
16. 
C=75.36 cm