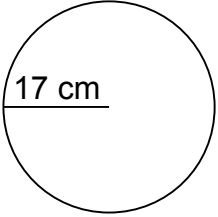
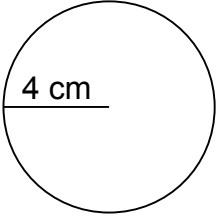
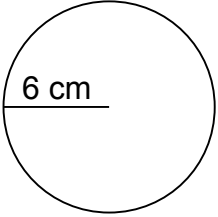
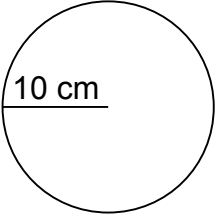
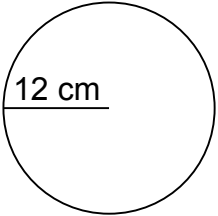
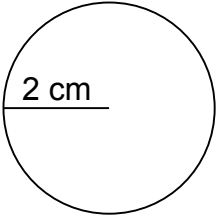
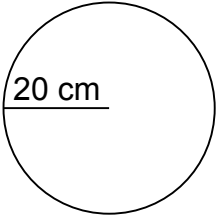
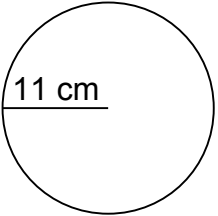
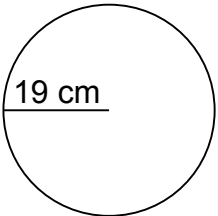
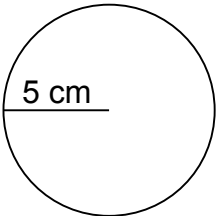
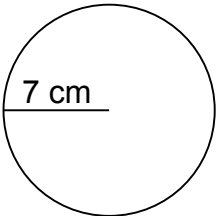
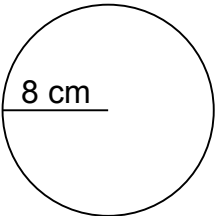
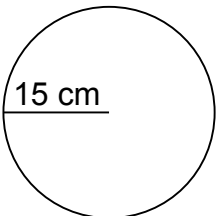
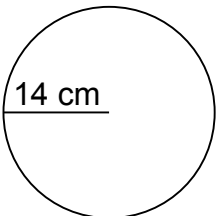
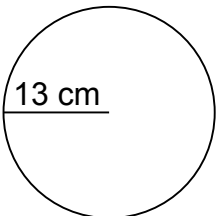
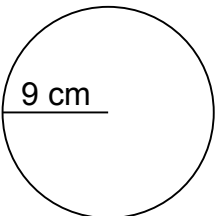


Calculate the circumference of each circle.

1.   
C=106.76 cm
2.   
C=25.12 cm
3.   
C=37.68 cm
4.   
C=62.80 cm
5.   
C=75.36 cm
6.   
C=12.56 cm
7.   
C=125.60 cm
8.   
C=69.08 cm
9.   
C=119.32 cm
10.   
C=31.40 cm
11.   
C=43.96 cm
12.   
C=50.24 cm
13.   
C=94.20 cm
14.   
C=87.92 cm
15.   
C=81.64 cm
16.   
C=56.52 cm