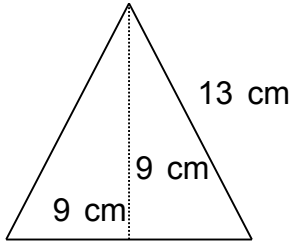


Find the perimeter.

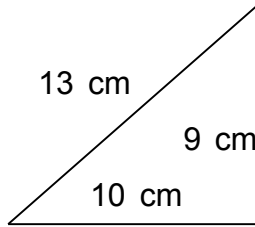
1.



$P = 35 \text{ cm}$

---

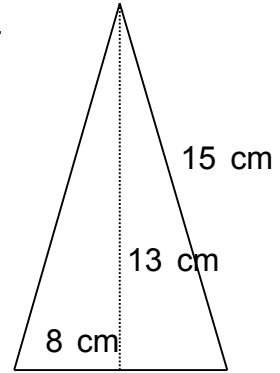
2.



$P = 32 \text{ cm}$

---

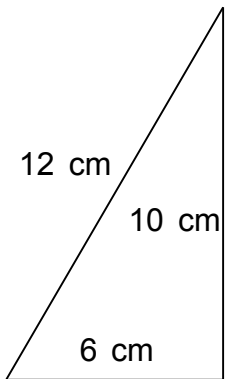
3.



$P = 38 \text{ cm}$

---

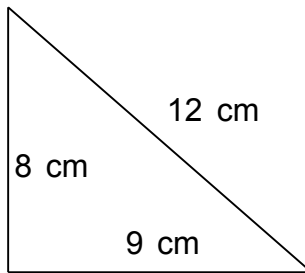
4.



$P = 28 \text{ cm}$

---

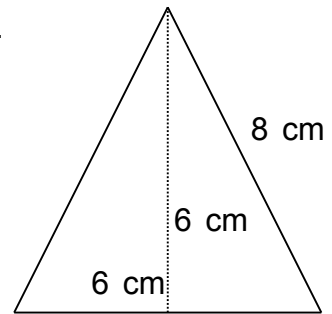
5.



$P = 29 \text{ cm}$

---

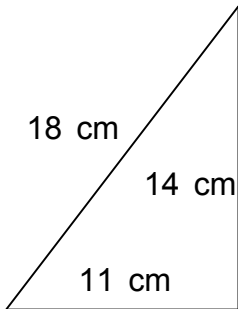
6.



$P = 22 \text{ cm}$

---

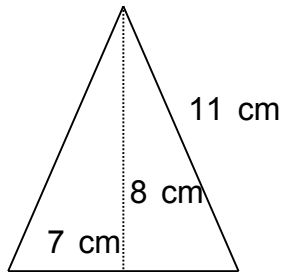
7.



$P = 43 \text{ cm}$

---

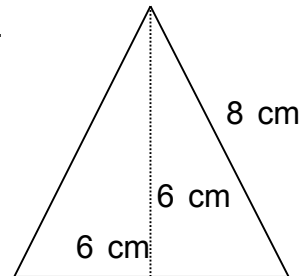
8.



$P = 29 \text{ cm}$

---

9.



$P = 22 \text{ cm}$

---