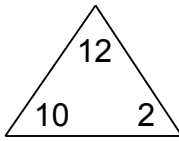


Complete each family of facts.

1.



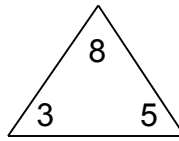
$$\boxed{10} + \boxed{2} = \boxed{12}$$

$$\boxed{2} + \boxed{10} = \boxed{12}$$

$$\boxed{12} - \boxed{10} = \boxed{2}$$

$$\boxed{12} - \boxed{2} = \boxed{10}$$

2.



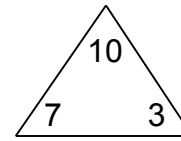
$$\boxed{3} + \boxed{5} = \boxed{8}$$

$$\boxed{5} + \boxed{3} = \boxed{8}$$

$$\boxed{8} - \boxed{3} = \boxed{5}$$

$$\boxed{8} - \boxed{5} = \boxed{3}$$

3.



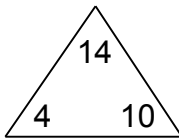
$$\boxed{7} + \boxed{3} = \boxed{10}$$

$$\boxed{3} + \boxed{7} = \boxed{10}$$

$$\boxed{10} - \boxed{7} = \boxed{3}$$

$$\boxed{10} - \boxed{3} = \boxed{7}$$

4.



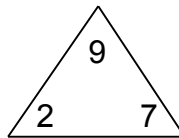
$$\boxed{4} + \boxed{10} = \boxed{14}$$

$$\boxed{10} + \boxed{4} = \boxed{14}$$

$$\boxed{14} - \boxed{4} = \boxed{10}$$

$$\boxed{14} - \boxed{10} = \boxed{4}$$

5.



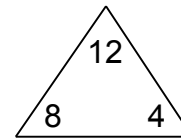
$$\boxed{2} + \boxed{7} = \boxed{9}$$

$$\boxed{7} + \boxed{2} = \boxed{9}$$

$$\boxed{9} - \boxed{2} = \boxed{7}$$

$$\boxed{9} - \boxed{7} = \boxed{2}$$

6.



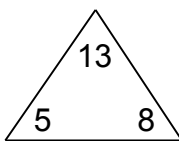
$$\boxed{8} + \boxed{4} = \boxed{12}$$

$$\boxed{4} + \boxed{8} = \boxed{12}$$

$$\boxed{12} - \boxed{8} = \boxed{4}$$

$$\boxed{12} - \boxed{4} = \boxed{8}$$

7.



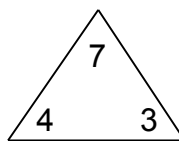
$$\boxed{5} + \boxed{8} = \boxed{13}$$

$$\boxed{8} + \boxed{5} = \boxed{13}$$

$$\boxed{13} - \boxed{5} = \boxed{8}$$

$$\boxed{13} - \boxed{8} = \boxed{5}$$

8.



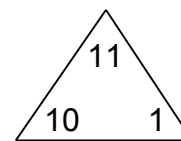
$$\boxed{4} + \boxed{3} = \boxed{7}$$

$$\boxed{3} + \boxed{4} = \boxed{7}$$

$$\boxed{7} - \boxed{4} = \boxed{3}$$

$$\boxed{7} - \boxed{3} = \boxed{4}$$

9.



$$\boxed{10} + \boxed{1} = \boxed{11}$$

$$\boxed{1} + \boxed{10} = \boxed{11}$$

$$\boxed{11} - \boxed{10} = \boxed{1}$$

$$\boxed{11} - \boxed{1} = \boxed{10}$$