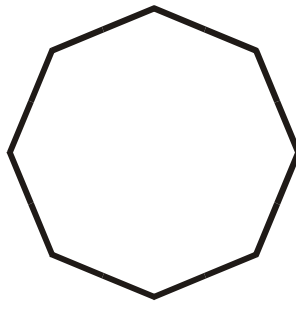


Identify the polygons.

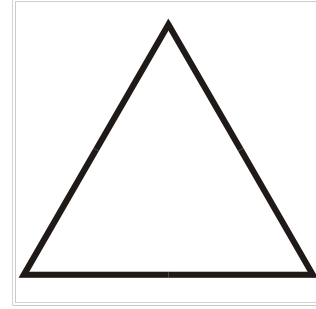
1.

Scalene Triangle

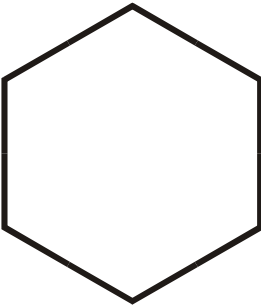
2.

Regular Octagon

3.

Equilateral Triangle

4.

Regular Hexagon

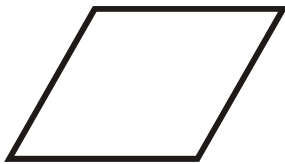
5.

Rectangle


6.

Parallelogram

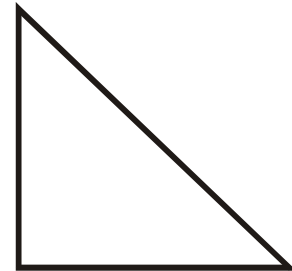
7.

Rhombus


8.

Square

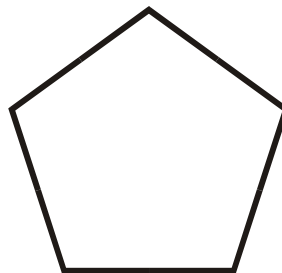
9.

Right Triangle

10.

Isosceles Triangle

11.

Regular Pentagon

12.

Trapezoid