

Identify the polygons.

1.



Parallelogram

2.




Rectangle

3.




Scalene Triangle

4.



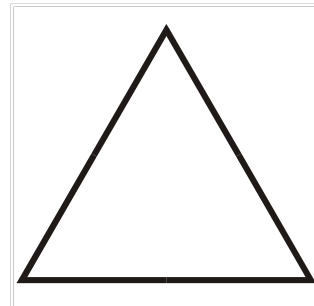
Isosceles Triangle

5.



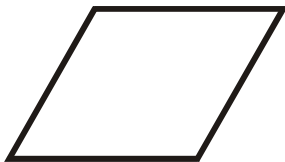
Square

6.



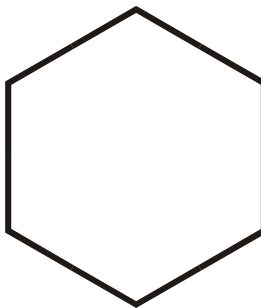
Equilateral Triangle

7.



Rhombus

8.




Regular Hexagon

9.



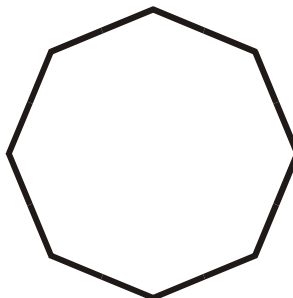
Trapezoid

10.



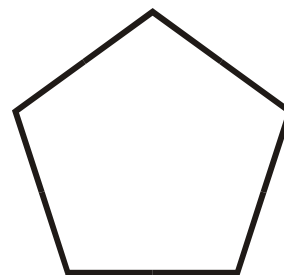
Right Triangle

11.



Regular Octagon

12.



Regular Pentagon