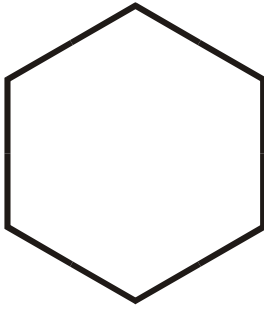
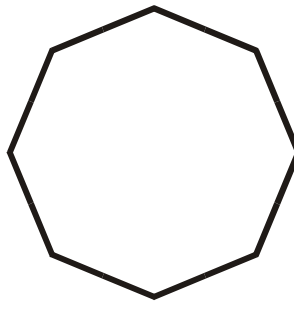


Identify the polygons.

1.

Regular Hexagon

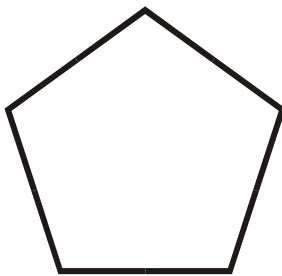
2.

Regular Octagon

3.

Trapezoid


4.

Regular Pentagon


5.

Scalene Triangle

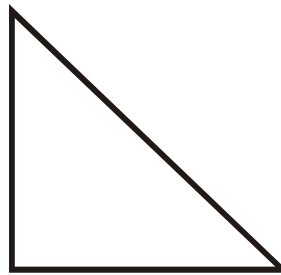
6.

Square

7.

Isosceles Triangle


8.

Right Triangle


9.

Parallelogram

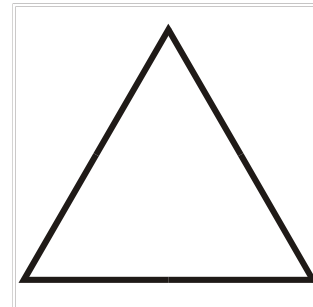
10.

Rectangle

11.

Rhombus

12.

Equilateral Triangle