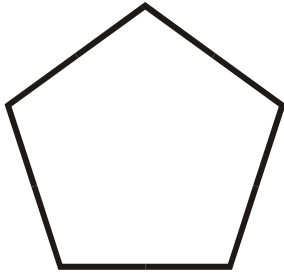


Identify the polygons.

1.



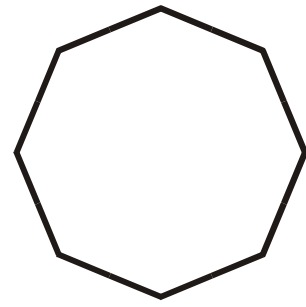
Regular Pentagon

2.




Scalene Triangle

3.




Regular Octagon

4.



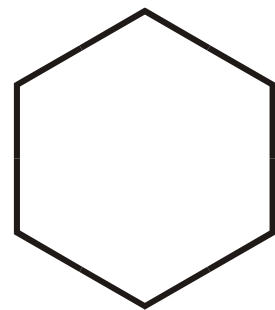
Equilateral Triangle

5.



Square

6.



Regular Hexagon

7.



Trapezoid

8.



Rectangle

9.



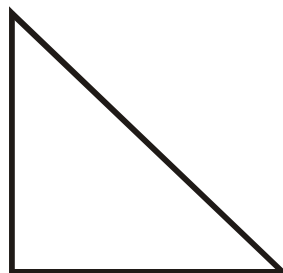
Parallelogram

10.



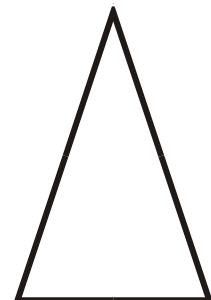
Rhombus

11.



Right Triangle

12.



Isosceles Triangle