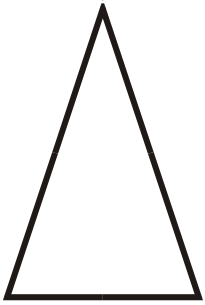



Identify the polygons.

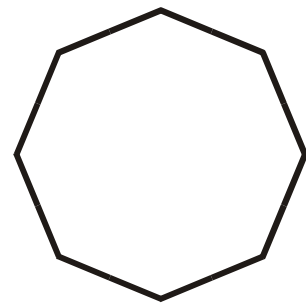
1.

Isosceles Triangle

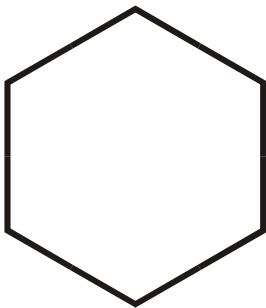
2.

Equilateral Triangle

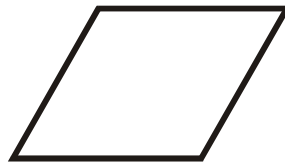
3.

Regular Octagon

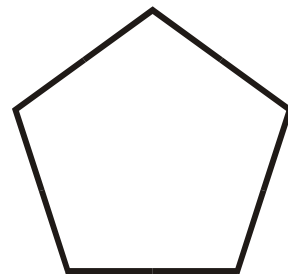
4.

Regular Hexagon

5.

Rhombus

6.

Regular Pentagon

7.

Scalene Triangle

8.

Rectangle


9.

Parallelogram

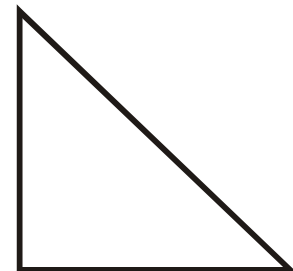
10.

Trapezoid

11.

Square

12.

Right Triangle