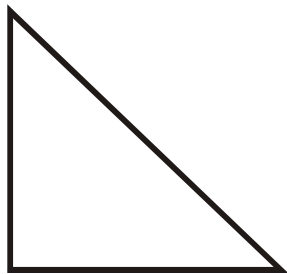


Identify the polygons.

1.

Right Triangle

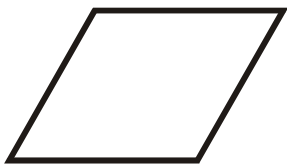
2.

Parallelogram


3.

Rectangle

4.

Rhombus

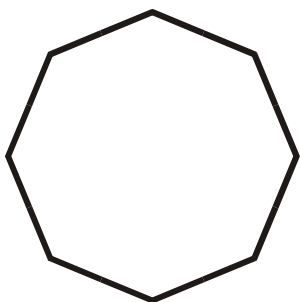
5.

Isosceles Triangle


6.

Trapezoid

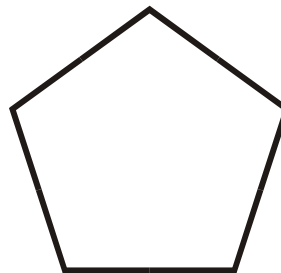
7.

Regular Octagon

8.

Square

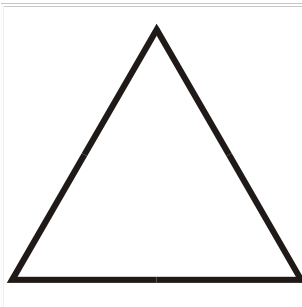
9.

Regular Pentagon

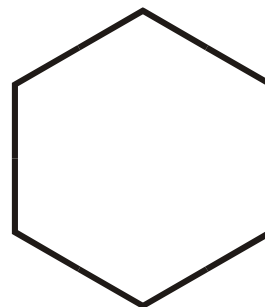
10.

Scalene Triangle

11.

Equilateral Triangle

12.

Regular Hexagon