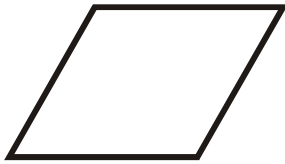



Identify the polygons.

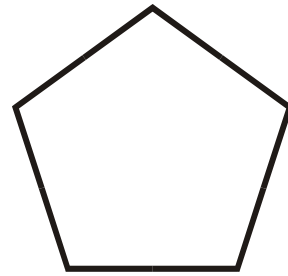
1.

Rhombus

2.

Square

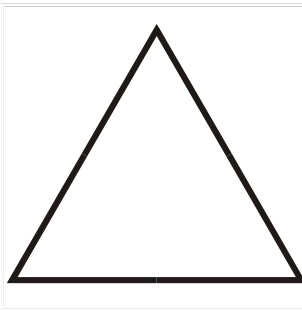
3.

Regular Pentagon

4.

Scalene Triangle

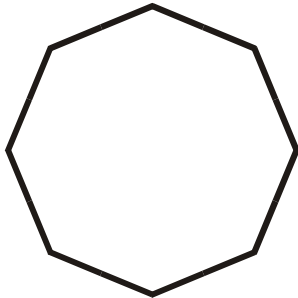
5.

Equilateral Triangle

6.

Trapezoid

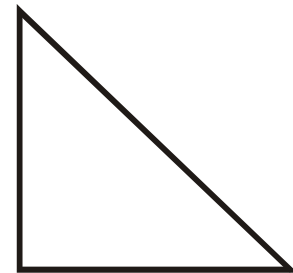
7.

Regular Octagon


8.

Rectangle

9.

Right Triangle

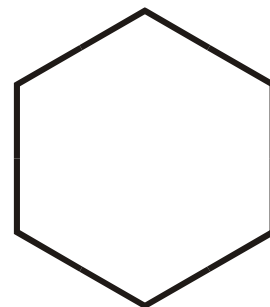
10.

Isosceles Triangle

11.

Parallelogram

12.

Regular Hexagon