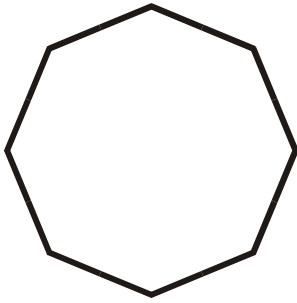


Identify the polygons.

1.



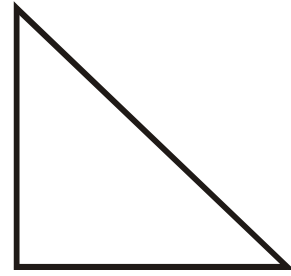
Regular Octagon

2.



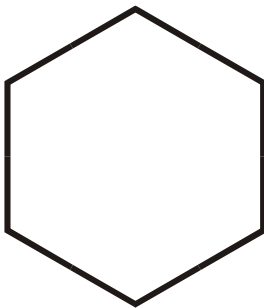
Parallelogram

3.



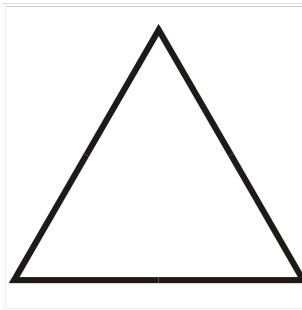
Right Triangle

4.



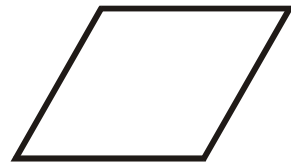
Regular Hexagon

5.



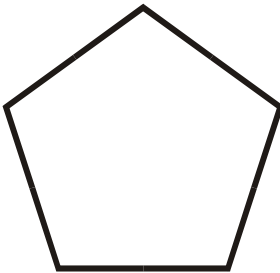
Equilateral Triangle

6.



Rhombus

7.



Regular Pentagon

8.




Trapezoid

9.



Scalene Triangle

10.




Isosceles Triangle

11.



Rectangle

12.



Square