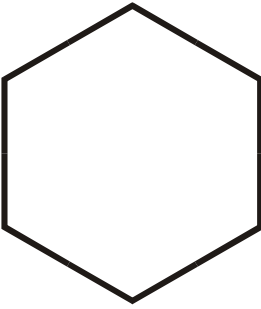


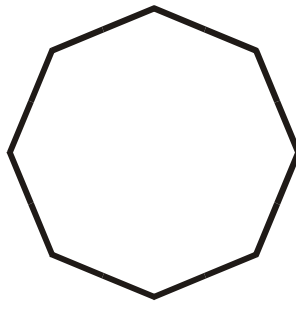
Identify the polygons.

1.



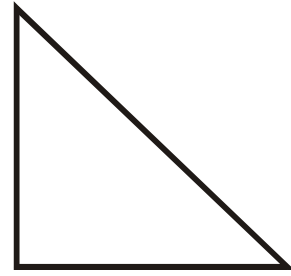
Regular Hexagon

2.



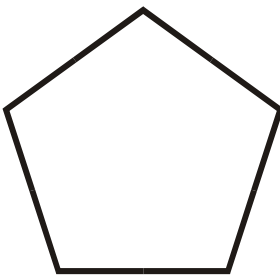
Regular Octagon

3.



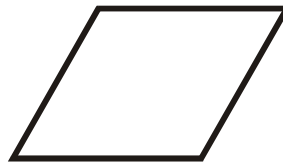
Right Triangle

4.



Regular Pentagon

5.




Rhombus

6.




Trapezoid

7.



Square

8.



Equilateral Triangle

9.




Rectangle

10.



Parallelogram

11.



Isosceles Triangle

12.



Scalene Triangle