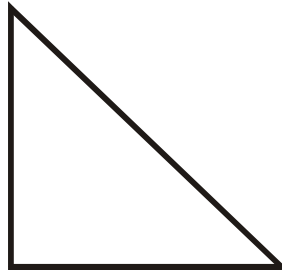


Identify the polygons.

1.

Trapezoid

2.

Right Triangle

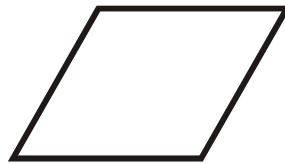
3.

Rectangle

4.

Scalene Triangle


5.

Rhombus

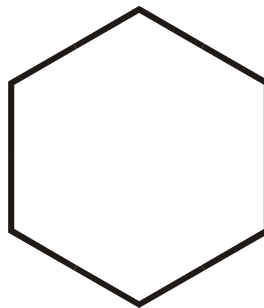
6.

Parallelogram

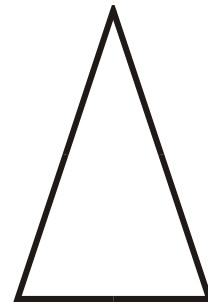
7.

Square

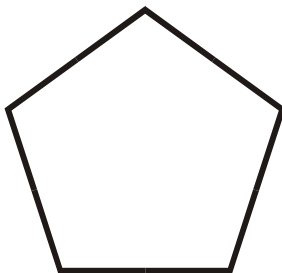
8.

Regular Hexagon

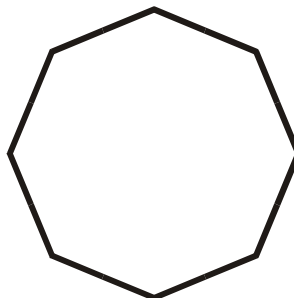
9.

Isosceles Triangle

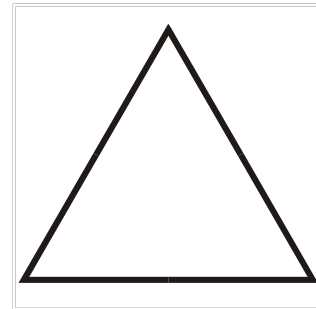
10.

Regular Pentagon

11.

Regular Octagon

12.

Equilateral Triangle