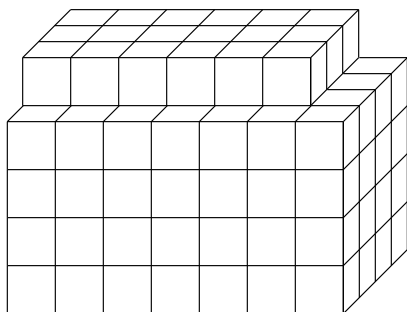


Determine the number of cubes.

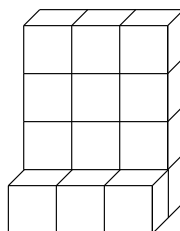
1.



130 cubic units

---

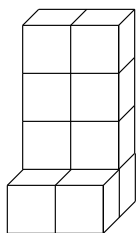
2.



15 cubic units

---

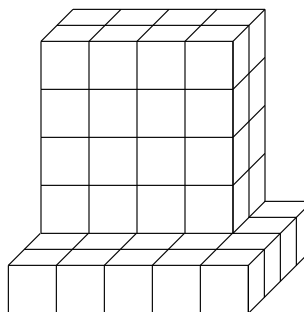
3.



10 cubic units

---

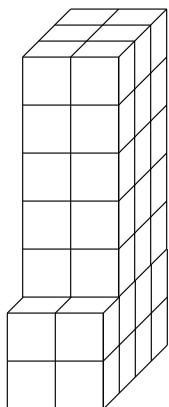
4.



52 cubic units

---

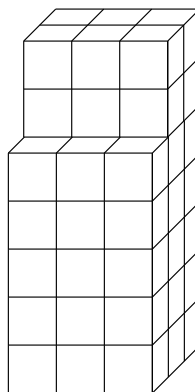
5.



46 cubic units

---

6.



57 cubic units

---